





**A** Answer

1  Write the number of cubes in words. \_\_\_\_\_

2 Draw beads on the abacus to show the number thirty-five. 

3  Write the number shown on the abacus. \_\_\_\_\_

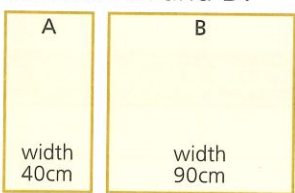
4  How much more do you need to make £1? \_\_\_\_\_ p

5 How many  make ? \_\_\_\_\_


6 How many  make ? \_\_\_\_\_

7 How many  make ? \_\_\_\_\_

8 What is the difference in width between A and B? \_\_\_\_\_ cm



9 What number is the arrow pointing to? \_\_\_\_\_



10  What time is it? \_\_\_\_\_

**B** Answer

- 1  $4 + 8$  tens = \_\_\_\_\_
- 2  $24 + 80 =$  \_\_\_\_\_
- 3  $6 + 2$  tens = \_\_\_\_\_
- 4  $76 + 20 =$  \_\_\_\_\_
- 5 5, 105, 205, 305, \_\_\_\_\_
- 6  $87 - 6$  tens = \_\_\_\_\_
- 7  $67 - 60 =$  \_\_\_\_\_
- 8  $99 - 3$  tens = \_\_\_\_\_
- 9  $69 - 3$  tens = \_\_\_\_\_
- 10 200, 150, 100, \_\_\_\_\_

**C** Answer

- 1 On Tuesday a farmer adds 40 litres of milk to 10 litres he got on Monday. How much has he got now? \_\_\_\_\_ litres
- 2 If I take £20 from my savings of £80, how much is left? £ \_\_\_\_\_
- 3 The total length of two sticks measuring 70cm and 60cm is \_\_\_\_\_ cm
- 4 The difference in price between two comics costing 90p and 30p is \_\_\_\_\_ p
- 5 The sum of two loads with masses 50kg and 60kg is \_\_\_\_\_ kg
- 6 A 100ml bottle of water has 10ml more than one which contains \_\_\_\_\_ ml
- 7 If I cut off 30m from a 90m length of rope, how much is left? \_\_\_\_\_ m
- 8 If 7g of a 100g packet of sweets is the wrapper, how much do the sweets weigh? \_\_\_\_\_ g
- 9 I scored 2 tens less than Leo who scored 5 tens. What was my score? \_\_\_\_\_
- 10 The time taken for a football match was 40min plus 10min half time. How long did it take altogether? \_\_\_\_\_ min