

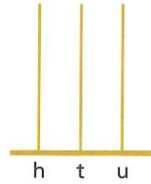
SECTION 3 | Test 11

A Answer

1 Write the number of cubes in words. _____



2 Draw beads on the abacus to show the number sixty-four. _____



3 Write the number shown on the abacus. _____



4 How much more do you need to make £1? _____ p



5 How many _____ make _____?



6 How many _____ make _____?



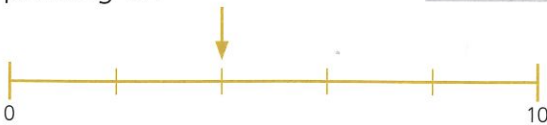
7 How many _____ make _____?



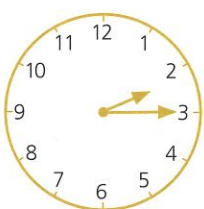
8 What is the difference between _____ and _____? _____ p



9 What number is the arrow pointing to? _____



10 What time is it? _____



B Answer

1 $5 + 5$ tens = _____

2 $35 + 50 =$ _____

3 $3 + 7$ tens = _____

4 $23 + 70 =$ _____

5 3, 23, 43, 63, _____

6 $78 - 3$ tens = _____

7 $98 - 30 =$ _____

8 $90 - 4$ tens = _____

9 $60 - 40 =$ _____

10 87, 77, 67, 57, _____

C Answer

1 Add 50cm and 60cm. _____ cm

2 Take 70 litres from 80 litres. _____ litres

3 The total mass of four boxes each weighing 10kg is _____ kg

4 The difference in value between 80p and 30p is _____ p

5 The sum of 100g and 90g is _____ g

6 100 is 5 tens more than _____

7 Subtract 30ml from 40ml. _____ ml

8 80min minus 50min is _____ min

9 70m is 10m shorter than _____ m

10 £60 plus £20 is _____ £