

ANSWERS

**Do not turn over or open this booklet until told to do so**

**CEA**

**Common Entrance Assessment**

**Paper 2**

**Saturday 28 November 2009**

**Time: 1 Hour**

• check that lines are clear in q3

Please fill in the following from your admission card:

• Number vettes on

Your Candidate Number \_\_\_\_\_ <sup>p5</sup>

Your Assessment Centre \_\_\_\_\_ <sup>rule out grid in</sup>

Your Date of Birth \_\_\_\_\_ <sup>9/32</sup>

Answer all 58 questions in this booklet

NOT TO BE FILLED IN BY THE PUPIL

**MATHEMATICS**

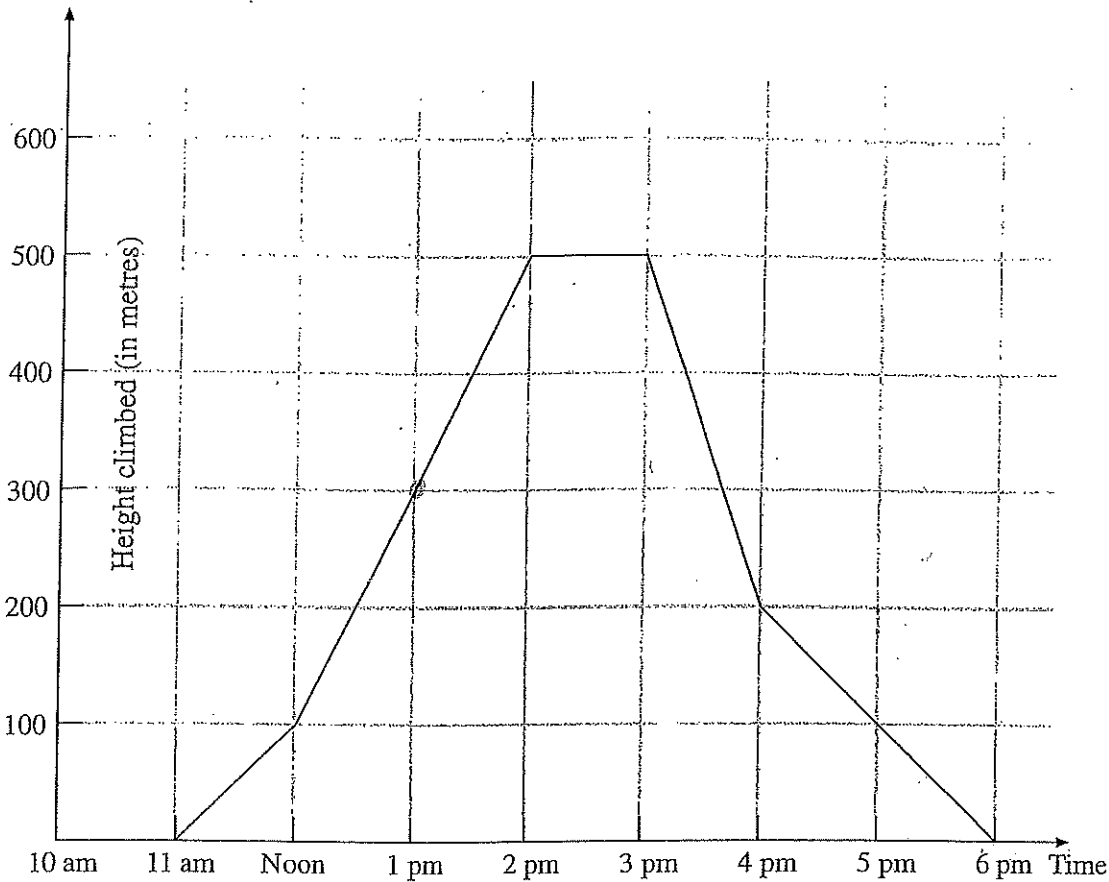
Page	Marks	Score	Check
1	(2)		
2	(2)		
3	(2)		
4	(2)		
8	(2)		
9	(4)		
10	(2)		
13	(2)		
14	(2)		
15	(4)		
19	(2)		
20	(2)		
21	(4)		
<b>TOTAL 32</b>			

NOT TO BE FILLED IN BY THE PUPIL

**ENGLISH**

Page	Marks	Score	Check
6	(6)		
7	(2)		
11	(1)		
12	(4)		
17	(6)		
18	(4)		
22	(3)		
23	(5)		
24	(1)		
<b>TOTAL 32</b>			
<b>TOTAL SCORE</b>			

1. A small animal climbs up to the top of a hill and then makes his way back to ground level. The graph below shows the animal's height above ground level at certain times of the day.



- (a) How high has the animal climbed at 1 pm? Write your answer in the space below.

300 metres

- (b) At what time did the animal arrive back at ground level? Write your answer in the space below.

6 pm

2. Jennifer is facing North. She turns through  $45^\circ$ . In which direction is she now facing? There are two possible correct answers. Write your answers in the spaces below.

NE

NW

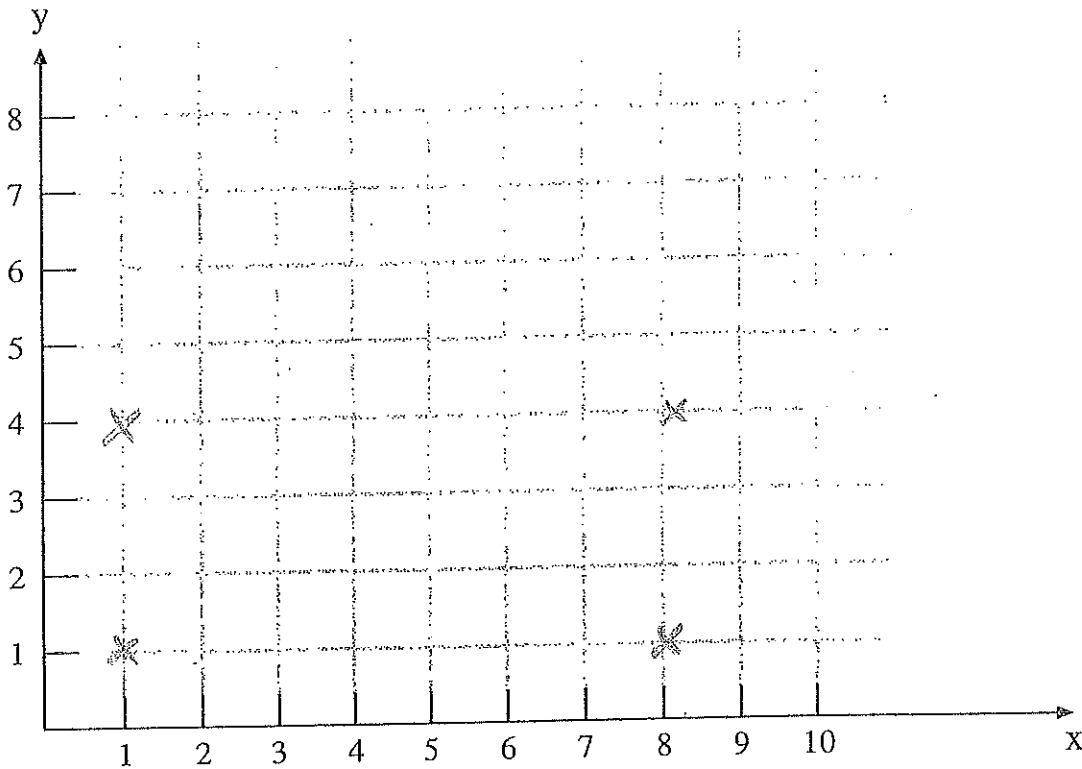


Do not write in this column

1

1

3. Look at the grid below.



- (a) Plot the points  $(1, 4)$ ,  $(8, 4)$  and  $(8, 1)$  on the grid.
- (b) When a fourth point is added to the grid, the four points can be joined to form a rectangle. Write the coordinates of the fourth point in the space below.

$(1, 1)$

4. What time is 5 hours and 22 minutes earlier than noon?  
Write your answer using the 12 hour clock (am/pm), in the space below.

6:38 am

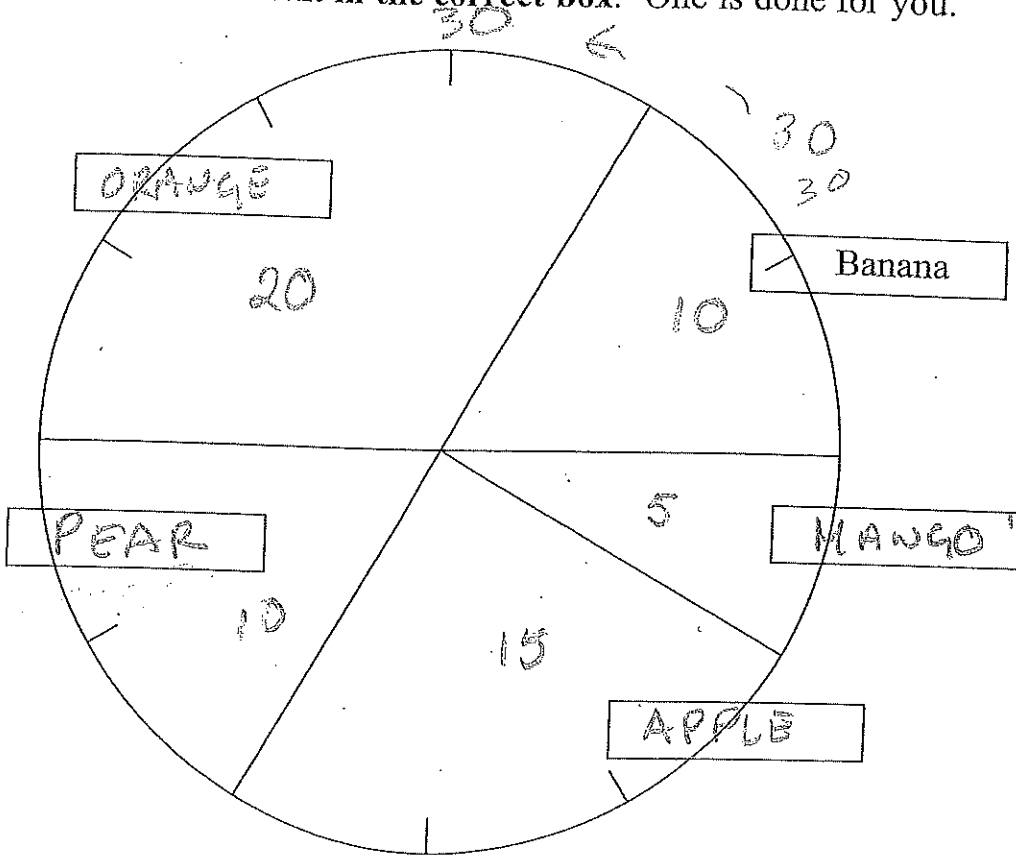
$$12:00 - 5 \text{ hrs} = 7 \text{ am} - 22 \text{ mins} \quad \begin{array}{r} 60 \\ 22 \\ \hline 38 \end{array}$$

Do not write in this column

5. A teacher is carrying out a survey about healthy eating in school. She asks **60 pupils** to choose the fruit they like best. Their choices are shown in the table below.

	banana	apple	orange	pear	mango
Number who liked...	10	15	20	10	5

The teacher then uses the table to draw the pie chart below. Write the name of each fruit in the correct box. One is done for you.



6. A school pays for:
- 25 pens at 40 pence each
  - 130 rulers at 60 pence each
  - and 4 notebooks at 50 pence each.

$$\begin{array}{r}
 0.40 \\
 \times 25 \\
 \hline
 2.00 \\
 8.00 \\
 \hline
 10.00
 \end{array}$$

$$\begin{array}{r}
 130 \\
 \times 60 \\
 \hline
 7800 \\
 \hline
 \pounds 18.00
 \end{array}$$

$$\begin{array}{r}
 10.00 \\
 18.00 \\
 \hline
 \pounds 28.00 \\
 \hline
 \pounds 90.00
 \end{array}$$

Find the **total amount** the school will have to pay. Write your answer in the space below.

£ 90.00



**My Brother Bert**

1 Pets are the hobby of my brother Bert.  
He used to go to school with a mouse in his shirt.

2 His hobby it grew, as some hobbies will,  
And grew and GREW and GREW until -

3 Oh don't breathe a word, pretend you haven't heard.  
A simply appalling thing has occurred -

4 The very thought makes me iller and iller:  
Bert's brought home a gigantic gorilla!

5 If you think that's really not such a scare,  
What if it quarrels with his grizzly bear?

6 You still think you could keep your head?  
What if the lion from under the bed

7 And the four ostriches that deposit  
Their football eggs in his bedroom closet

8 And the aardvark out of his bottom drawer  
All danced out and joined in the roar?

9 What if the pangolins were to caper  
Out of their nests behind the wallpaper?

10 With the fifty sorts of bats  
That hang on his hatstand like old hats,

11 And out of a shoebox the excitable platypus  
Along with the ocelot or jungle-cattypus?

12 The wombat, the dingo, the gecko, the grampus -  
How they would shake the house with their rumpus!

Not to forget the bandicoot  
Who would certainly peer from his battered old boot.

Why it could be a dreadful day,  
And what, oh what, would the neighbours say!

Ted Hughes

Do not write  
in this column



14. In verse 12 of the poem the word **rumpus** is used. What is the meaning of rumpus? Tick  the **best** answer.

a rumpus is an animal's grunting noise

a rumpus is a disruptive commotion

a rumpus is an animal's hindquarters

15. When Bert adds one particular animal to his collection, his brother feels sick. Which animal? Give your answer by ticking  the correct box below.

gorilla

aardvark

lion

grizzly bear

Do not write in this column

1

1

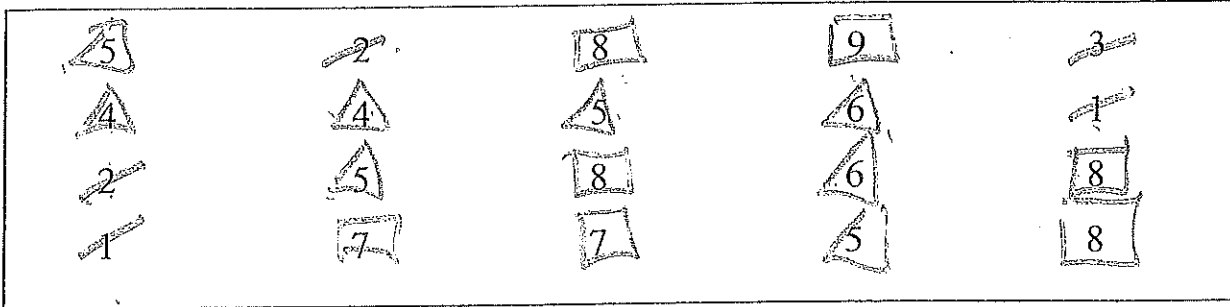
2

(2)



16. In a dancing competition Sean has to dance **20 times**. Each dance is scored out of 10 marks. In the box below are the marks awarded to Sean by one of the judges.

Do not write in this column



The **frequency table** below is to be used to show the marks awarded by the judge. Complete the table by writing the correct number in each of the boxes below.

Sean's score	Frequency
1 - 3	5
4 - 6	8
7 - 9	7

17. The statements below are about three dimensional solid objects. Tick  each of the statements below **true** or **false**. The first one is done for you.

	True	False
A cube has 6 faces	<input checked="" type="checkbox"/>	<input type="checkbox"/>
A cylinder has 2 flat faces and 1 curved face	<input checked="" type="checkbox"/>	<input type="checkbox"/>
A cube has 6 vertices <i>has 8</i>	<input type="checkbox"/>	<input checked="" type="checkbox"/>
A triangular prism has 9 edges	<input checked="" type="checkbox"/>	<input type="checkbox"/>

18. A train travels 2 kilometres. A second train travels 48 metres further. How far does the second train travel? Circle the correct answer below.

248m      50m      2.48km      50km      2048m

19. Look at the two numbers below.

0.80      0.74

$0.8 \times 100$

Multiply the larger of the two numbers by 100.

Write your answer in the space below.

80 (80.00)

20. Write the number sixty and one quarter as a decimal number.

Write your answer in the space below.

60.25

21. Complete each number statement below by writing the correct number in the box.

(a)  $\frac{2}{7}$  of 56 is 16

(b)  $8 \frac{2}{5}$  of 20

$3 \times 2$

$1 = 4$

$\frac{5}{5} = 20$

Do not write in this column


1

1

1

1

22. The rectangle below is divided into squares of equal area.



$$\frac{6}{10} = \frac{60}{100}$$

What **percentage** of the rectangle is shaded?

Write your answer in the space below.

60 %

23. In St. Petersburg the temperature is  $-17^{\circ}\text{C}$ . The temperature in Belfast is  $22^{\circ}\text{C}$  higher. What is the temperature in Belfast? Write your answer in the space below.

5  $^{\circ}\text{C}$ .

Do not write  
in this column

1

1



Do not write in this column

25. There is an apostrophe missing from one of the words in the passage. Tick  the number of the line containing the word with the missing apostrophe.

- line 3
- line 5
- line 15
- line 17

26. A question mark is needed instead of a full stop in one of the lines of the passage. Tick  the number of the line where the question mark is needed.

- line 4
- line 8
- line 12
- line 17

27. A word has been used incorrectly in the passage. Tick  the number of the line where the error was made.

- line 1
- line 9
- line 13
- line 18

28. Look at the four words below. Choose the **best** word to fill the gap in line 10. Tick  **one** of the boxes below to show your choice.

- depended
- rely
- need
- learn

Do not write in this column

29. Eileen is drawing a Venn diagram. She is putting the **whole numbers from 1 to 20** into three sets. Each set is shown as a circle. The **factors of 36** are in one circle, the **multiples of 3** are in another circle, and the **prime numbers** are in a third circle. **Some of the numbers from 1 to 20** are shown on the Venn diagram below.

Factors 36

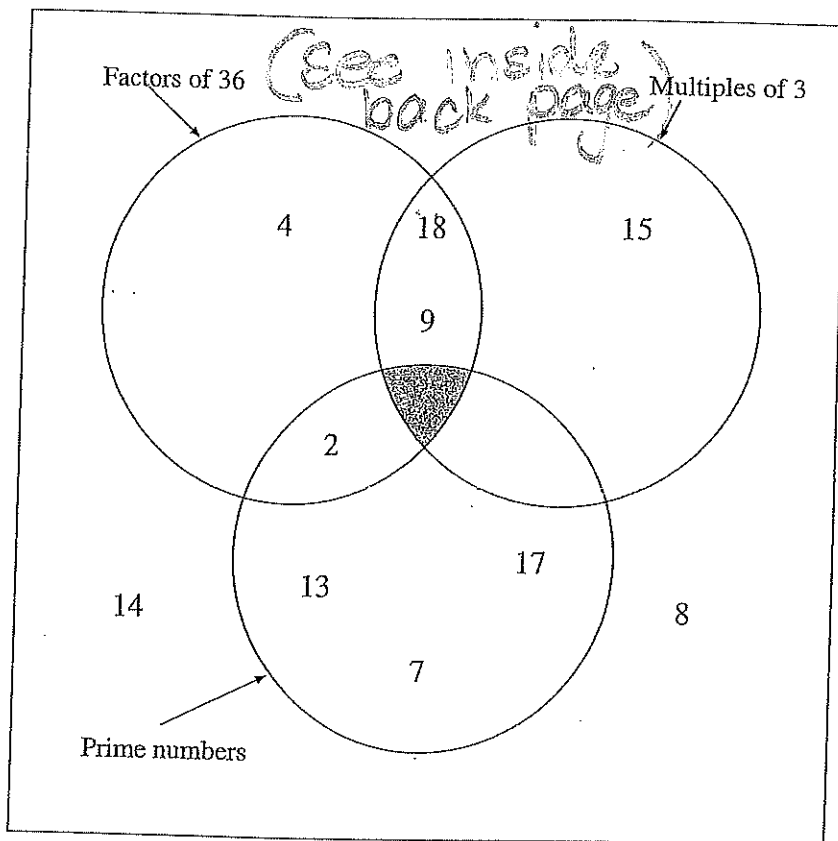
- 1 36
- 2 18
- 3 12
- 4 9
- 6

Multiples 3

- 3, 6 9
- 12 15 18

Prime

- 2, 3 5 7
- 11 13 17
- 19



only poss answer are multiples of 3 between 1, 20 not shown  
3, 6, not prime  
12, not prime

Which number should Eileen put in the shaded section of the Venn diagram?

Write your answer in the space below.

3

- 3, 5, 6, 10
- 11, 12 16
- 19 20

30. Look at the statements below. Tick  each statement **true** or **false**. The first is done for you.

True

False

45  $\frac{1}{8}$  of a complete turn is an acute angle

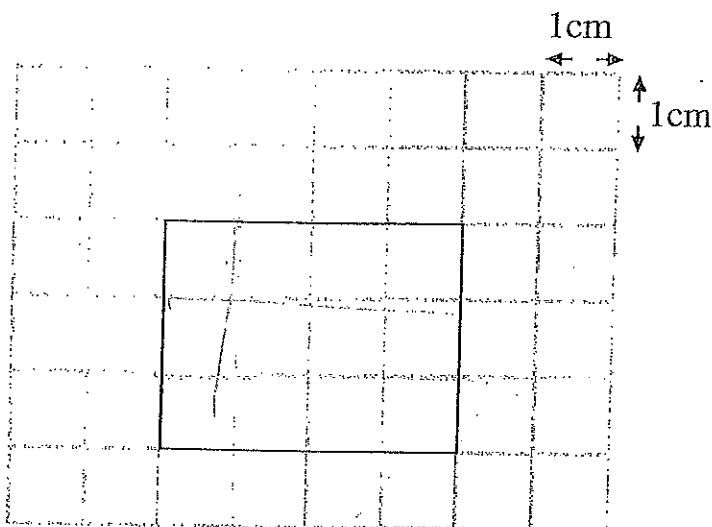


135  $\frac{3}{8}$  of a complete turn is an obtuse angle



225  $\frac{5}{8}$  of a complete turn is more than 3 right angles

31. Look at the grid below. It is made up of small squares. The side of each small square is 1 cm long. A **rectangle** is drawn on the grid.

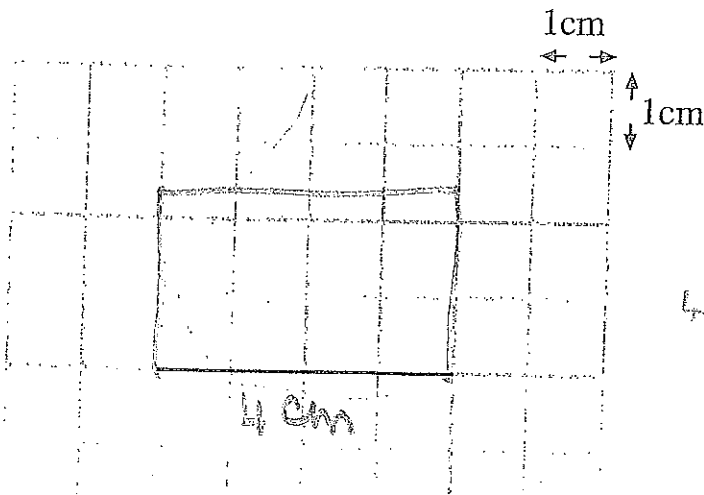


Find the **area** of the rectangle. Write your answer in the space below.

12 cm<sup>2</sup>

HARD

32. Look at the grid below. It is made up of small squares. The side of each small square is 1 cm long. A **line of length 4 cm** is drawn on the grid. This line is **one side** of a **rectangle of area 10 cm<sup>2</sup>**. Draw the other **three sides** of the rectangle in the grid. Draw your lines **clearly** and **accurately**.



$$4 \times 2\frac{1}{2} = 10$$

$$\begin{array}{r} 2\ 5 \\ 4 \overline{) 10} \end{array}$$

$$4 \times \boxed{2.5} = 10$$

$$4 \times 2 = 8$$

IN BETWEEN

$$4 \times 3 = 12$$

Do not write in this column

33. Look at the three calculations below.

$38 \times 14 = 532$

$54 \times 12 = 648$

$148 \div 4 = 37$

Use these to help you complete the calculations below.

$76 \times 14 = \underline{1064}$  (76 is double 38) so double ans.  
 $54 \times 24 = \underline{1296}$  (24 is double 12) double answer  
 $19 \times 14 = \underline{266}$  (19 is  $\frac{1}{2}$  of 38) so  $\frac{1}{2}$  answer  
 $148 \div 2 = \underline{74}$  (2 is  $\frac{1}{2}$  of 4) so double 37 answer people!

Do not write in this column

34. What are the values of **a** and **b** in the calculations below?  
Write your answers in the spaces provided.

$716 - a = 125$

$a = \underline{591}$

$108 \div b = 9$

$b = \underline{12}$

35. Find the missing number in the calculation below.

Write your answer in the box provided.

$\boxed{43.2} \div 6 = 7.2$

$$\begin{array}{r} 4.2 \\ \times 6 \\ \hline 42.2 \end{array}$$

36. What is 6.25 kilograms in grams? Tick  the correct answer.

0.625 g

6250 g

625 g

0.00625 g



On killing a tree

It takes much time to kill a tree,  
Not a simple jab of the knife  
Will do it. It has grown  
Slowly consuming the earth,  
Rising out of it, feeding  
Upon its crust, absorbing  
Years of sunlight, air, water,  
And out of its leprous hide  
Sprouting leaves.

So hack and chop  
But this alone won't do it.  
Not so much pain will do it.  
The bleeding bark will heal  
And from close to the ground  
Will rise curled green twigs,  
Miniature boughs  
Which if unchecked will expand again  
To former size.

No,

The root is to be pulled out -  
Out of the anchoring earth;  
It is to be roped, tied,  
And pulled out - snapped out  
Or pulled out entirely,  
Out from the earth-cave.  
And the strength of the tree exposed,  
The source, white and wet,  
The most sensitive, hidden  
For years inside the earth.

Then the matter  
Of scorching and choking  
In sun and air,  
Browning, hardening,  
Twisting, withering,  
And then it is done.

Gieve Patel

Do not write  
in this column

37. Circle the **best word** or **best pair of words** to complete the sentence below.

In the poem the author describes how a branch leaf tree twig will change colour become shorter scream die if it is pulled out of the earth roots branch lake.

38. In the **second verse** the poet talks about the tree as if it was a person. For example, the poet describes the tree's bark as **bleeding**. Find **two other words** in the **second verse** where the author talks about the tree as if it was a person. Write your answers in the spaces below.

pain                      heal

39. Look at the **first verse** of the poem. For each of the phrases below find the **word** in the first verse which is **closest in meaning** to the phrase. Write the word in the space provided.

thick skin of an animal

hide

the hard outer part of bread

crust

disfigured and gnarled

leprosy

12 (crust)  
10 (leprosy)

40. **According to the poem**, to kill a tree, what must you do after you've uprooted the tree? Tick  the **best** answer.

jab it with a knife

expose it to the sun and air

hack and chop its bark

Do not write in this column

1
2
2
1

Do not write in this column

41. Look at the **third verse** of the poem. Which **word** is used to show that the **earth holds the tree firmly in place**? Tick  the **best** answer.

- anchoring
- pulled
- roped
- tied

42. The words **kill, leprous, slowly** and **tree** are used in the poem. Tick  the correct box to show whether each word is a **noun, verb, adverb** or **adjective**.

	noun	verb	adverb	adjective
kill		<input checked="" type="checkbox"/>		
leprous				<input checked="" type="checkbox"/>
slowly			<input checked="" type="checkbox"/>	
tree	<input checked="" type="checkbox"/>			

43. Look at the **first verse of the poem**. In this verse, the poet uses a **phrase of only three words** to suggest that the earth in which the tree grows is food for the tree. Write the phrase in the space below.

consuming the earth

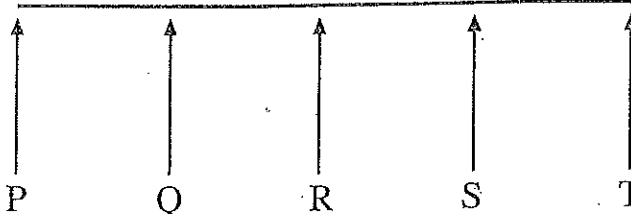
2

44. A bag contains 20 balls. There are 10 red balls, 5 black balls and 5 blue balls. It is not possible to see into the bag.

Look at the probability line below. The letters P, Q, R, S and T show equally spaced positions on the probability line.

Impossible

Certain



$\frac{10}{20}$	$\frac{5}{20}$	$\frac{5}{20}$
$\frac{1}{2}$	$\frac{1}{4}$	$\frac{1}{4}$

A pupil puts her hand in the bag and chooses a ball. Each statement below can be completed by **choosing a letter**. Complete each statement using a letter from the probability line. The first has been done for you.

- Arrow P shows the probability that a <sup>NO PINK</sup> pink ball is chosen.
- Arrow R shows the probability that a <sup>1/2 50/100</sup> red ball is chosen.
- Arrow Q shows the probability that a black ball is chosen.
- Arrow S shows the probability that a black ball isn't chosen.  
 So a red or a blue will be:  $\frac{15}{20}$  opposite ev

45. Look at the list of five numbers below:

6                  16                  17                  48                  27

Complete each sentence below by choosing a number from the list.

- (a) 17 is a prime number.
- (b) 16 is a square number.
- (c) 6 is a factor of 24.

Do not write in this column





The Snow Walker

The morning came when snow blew in the air ... only a thin mist of fine snow but enough to tell us that winter had come and it had not brought the deer.

But a few days afterwards the deer came. Ungyala and I went out with light hearts but only a few deer had come to the river. These few were so poor and lacking in fat that we knew they were not the forerunners of the great herds but stragglers that lagged behind, being either too weak or too sick to keep up. We knew then that the deer spirit had led the herds southward by some different path.

The next day there were no deer at the crossing and none to be seen anywhere upon the sweep of the plains, and we had killed barely enough meat to feed ourselves and the dogs for two months.

The real snows came and we began the winter with hearts that were shaken by misgivings. We thought of abandoning our camp and trying to make our way to the coast but we could not do this until enough snow had fallen to make sled travel possible. So we stayed where we were, hoping we would find some of the solitary winter deer that sometimes remain in the land. Ungyala and I roamed with pack dogs over the country for many long miles. A few hares and ptarmigan fell to our guns, but these were no more than food for our hopes.

Farley Mowat

- 52. Circle the best word or best group of words to complete the sentences below.

The passage is about two hunters/animals awaiting the arrival of a pack of dogs/deer/summer. They would find it difficult to

survive/celebrate the winter if they couldn't hunt hares/ptarmigan/deer.

They couldn't travel to the coast because there were too many hares

there were too few dogs/their sleds couldn't be used yet.

- 53. Look at the second paragraph of the passage. What phrase of three words tells us that the deer were thin? Write your answer in the space below.

lacking in fat

Do not write in this column

2

1

54. The phrase **fell to our guns** is used in the **last paragraph** of the passage. **One** of the statements below gives the correct meaning of the phrase. Tick  the statement giving the correct meaning.

- were killed or wounded by the hunters' guns
- lay on the ground when they spotted the guns
- were deceived by the tricks the hunters played
- were attracted by the light glinting on the guns

55. **Four animals** are named in the passage. One is **ptarmigan**. Write the names of the other **three** in the spaces below.

deer  
hares  
dogs

1 = 1  
 2 = 1

56. The phrase **went out with light hearts** is used in **paragraph two** of the passage. It means one of the following. Tick  the **best** answer.

- the hunters were happy about the arrival of spring
- the snow was causing the hearts of the hunters to beat faster
- the hunters felt ill because they couldn't find deer
- the hunters were optimistic about finding deer

57. Why couldn't the hunters abandon camp and travel to the coast? Look at the four answers below and tick  the **best** answer.

- they didn't have enough food for the journey
- their sled wasn't strong enough to travel
- the snow wasn't deep enough to travel
- their dogs were needed to search for deer

Do not write in this column

1	
2	
1	
1	



58. In the passage, what **sentence** suggests that the hunters were **north** of the deer herds? Write the sentence in the space below.

We knew then that the deer spirit led the herds southward by some old path.

Do not write in this column

**THIS IS A BLANK PAGE**