

**Do not turn over or open this booklet until told to do so**

# CEA

## Common Entrance Assessment

### Paper 1

**Saturday 14 November 2009**

**Time: 1 Hour**

**Please fill in the following from your admission card:**

Your Candidate Number \_\_\_\_\_

Your Assessment Centre \_\_\_\_\_

Your Date of Birth \_\_\_\_\_

**Answer all 58 questions in this booklet**

NOT TO BE FILLED IN BY THE PUPIL			
MATHEMATICS			
Page	Marks	Score	Check
1	(4)		
2	(3)		
3	(1)		
7	(2)		
8	(2)		
9	(2)		
10	(2)		
13	(3)		
14	(5)		
18	(3)		
19	(2)		
20	(3)		
<b>TOTAL 32</b>			

NOT TO BE FILLED IN BY THE PUPIL			
ENGLISH			
Page	Marks	Score	Check
4	(3)		
5	(5)		
6	(3)		
11	(1)		
12	(4)		
15	(1)		
16	(6)		
17	(1)		
21	(2)		
22	(6)		
<b>TOTAL 32</b>			
<b>TOTAL SCORE</b>			

1. The **10 numbers** below show the number of electronic gadgets in the homes of 10 primary school pupils.

5   2   8   3   8   3   5   7   7   2

What is the **mean** (average) number of gadgets?

Write your answer in the space below.

\_\_\_\_\_ gadgets

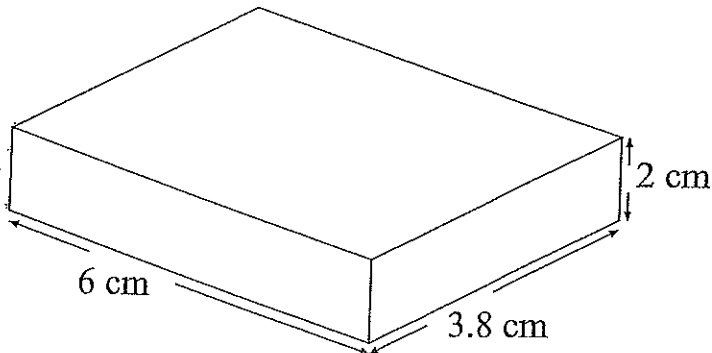
2. Look again at the 10 numbers.

What is the **range**?

Write your answer in the space below.

\_\_\_\_\_ gadgets.

- 
3. The **cuboid** below is 6 cm by 3.8 cm by 2 cm.



What is the **volume** of this cuboid? Write your answer in the space below.

\_\_\_\_\_ cm<sup>3</sup>

- 
- 4.(a) What is **7:52 am** as a **24 hour clock time**? Write your answer in the space below.

\_\_\_\_\_

- (b) What is **7:52 pm** as a **24 hour clock time**? Write your answer in the space below.

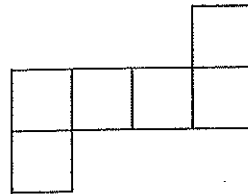
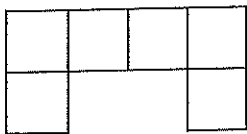
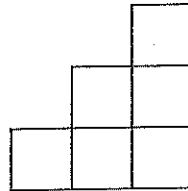
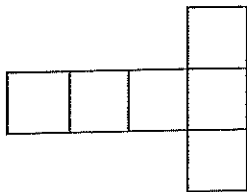
\_\_\_\_\_

Do not write in this column

5. Complete the table below by putting a fraction or a percentage in each of the four empty boxes.

Percentage	$33\frac{1}{3}\%$		75%		20%
Fraction		$\frac{1}{2}$		$\frac{1}{4}$	$\frac{1}{5}$

6. A net of a cube can be folded to make a cube. Look at the four figures below. Circle the two figures that are nets of a cube.



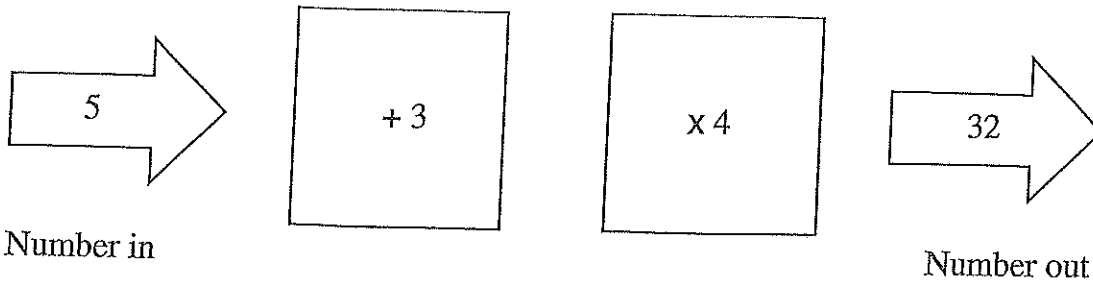
7. Look at the two calculations below. Complete each calculation by finding the missing number. Write your answers in the spaces below.

$$1642 - 647 = \underline{\hspace{2cm}}$$

$$1487 + \underline{\hspace{2cm}} = 1642$$

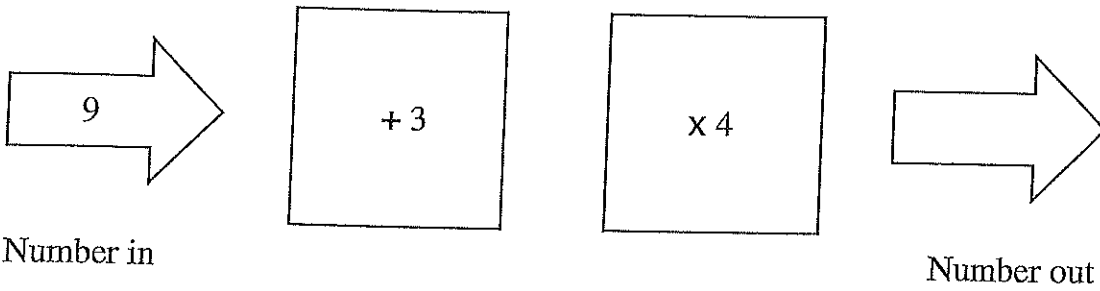
Do not write  
in this column

8. Look at the function machine below.

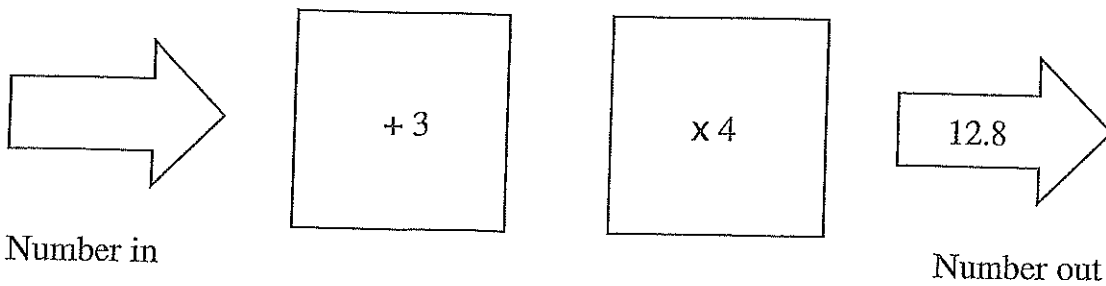


Complete the two function machines below by writing the correct number in the blank arrow.

(a)



(b)



Do not write in this column

Do not write  
in this column

### Homework! Oh, Homework!

Homework! Oh, homework!  
I hate you! You stink!  
I wish I could wash you  
away in the sink,  
if only a bomb  
would explode you to bits.  
Homework! Oh, homework!  
You're giving me fits.

I'd rather take baths  
with a man-eating shark,  
or wrestle a lion  
alone in the dark,  
eat spinach and liver,  
pet ten porcupines,  
than tackle the homework  
my teacher assigns.

Homework! Oh, homework!  
You're last on my list,  
I simply can't see  
why you even exist,  
if you just disappeared  
it would tickle me pink.  
Homework! Oh, homework!  
I hate you! You stink!

Jack Prelutsky

9. Three animals are mentioned in the poem. Write their names in the spaces below.

\_\_\_\_\_

10. Which of these words **best** describes the poem? Tick  the best answer.

- serious
- humorous
- depressing
- exciting

11. The four words **teacher**, **reminds**, **carefully** and **difficult** are used in the sentence below.

**My teacher always reminds us to think carefully before answering difficult homework questions.**

Tick  the correct box in the table below to show which of the four words is used as a **verb**, a **noun**, an **adjective** or an **adverb** in the sentence.

	verb	noun	adjective	adverb
teacher				
reminds				
carefully				
difficult				

12. Write the **past tense** of the following words in the spaces below. Be careful with your spelling. The first has been done for you.

assign	assigned
wash	_____
explode	_____
give	_____
stink	_____

13. Look at the **last verse** of the poem. Find the **phrase of four or five words** that is closest in meaning to the words: **I would be delighted**.

Write the phrase in the space below.

\_\_\_\_\_

Do not write in this column

14. The last line of the second verse of the poem uses the word **assigns**. Look at the four statements below. Tick  the box opposite the correct statement. Only **one** of the statements is correct.

When my teacher **assigns** a homework, it means that:

she writes her name at the end of the homework

she keeps a record of each pupil's homework mark

she asks each pupil to mark their partner's homework

she tells the pupils what they must do for homework

15. Find the **word** in the poem closest in meaning to each of the following. Write your answer in the space below.

having a nasty smell \_\_\_\_\_

blow up \_\_\_\_\_

vanished from sight \_\_\_\_\_

Do not write  
in this column.

16. (a) The temperature in Belfast is  $3^{\circ}\text{C}$ .  
The temperature in Glasgow is  $8^{\circ}\text{C}$  lower than in Belfast.

What is the temperature in Glasgow?  
Write your answer in the space below.

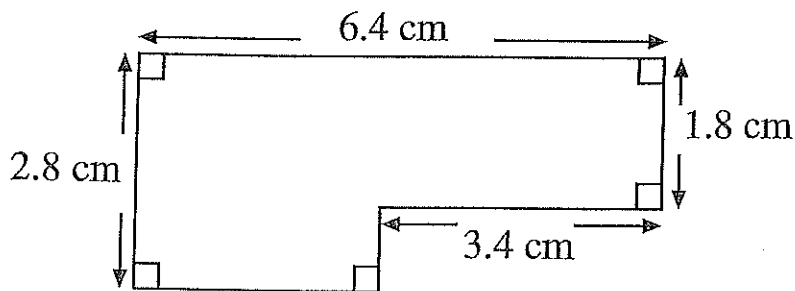
\_\_\_\_\_  $^{\circ}\text{C}$

- (b) The temperature in Edinburgh is  $-4^{\circ}\text{C}$ .  
The temperature in Dresden is  $7^{\circ}\text{C}$  lower.

What is the temperature in Dresden?  
Write your answer in the space below.

\_\_\_\_\_  $^{\circ}\text{C}$

17. Look at the shape below.



Find the **perimeter** of the shape. Write your answer in the space below.

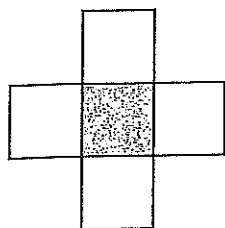
\_\_\_\_\_ cm

Do not write  
in this column

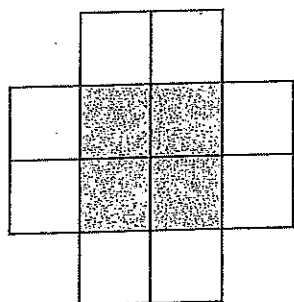


18. Look at the sequence of three patterns below. Each pattern is made up of shaded and unshaded squares. For example, **pattern 2** has 4 shaded squares and 8 unshaded squares.

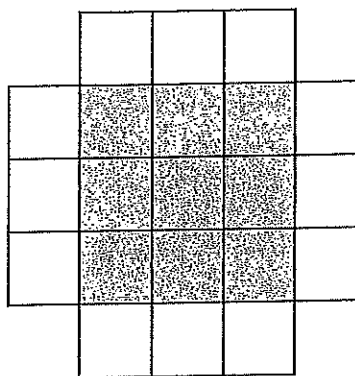
Pattern 1



Pattern 2



Pattern 3



Look at the table below for the number of **unshaded** squares in each pattern.

Pattern	1	2	3
Unshaded squares	4	8	12

How many **unshaded** squares are there in **pattern 7**? Write your answer in the space below.

\_\_\_\_\_ unshaded squares

19. Look at the table below for the number of **shaded** squares in each pattern.

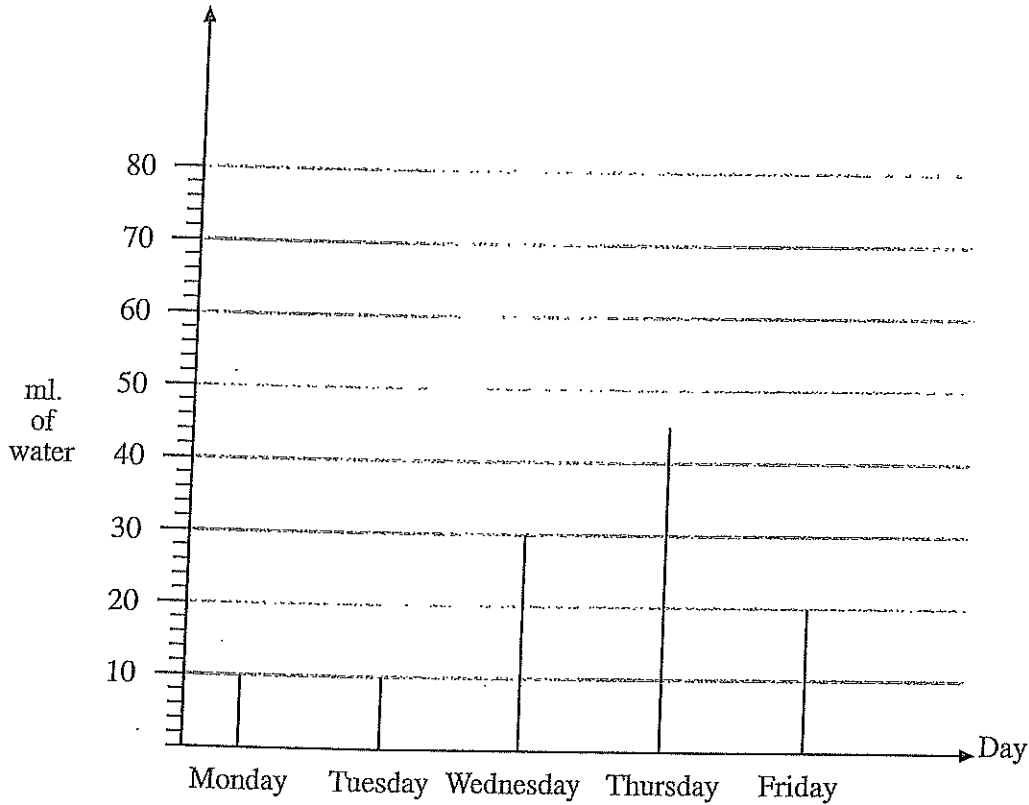
Pattern	1	2	3
Shaded squares	1	4	9

How many **shaded** squares are there in **pattern 8**? Write your answer in the space below.

\_\_\_\_\_ shaded squares

Do not write in this column

20. Nora's pet hamster is ill. The vet tells Nora to give the hamster water each day. Nora must keep a record of the amount of water the hamster drinks each day. Nora draws the graph below. The graph shows how many millilitres of water the hamster drinks over 5 days.



- (a) The hamster had more water to drink on Friday than on Monday. **How much more?** Write your answer in the space below.

\_\_\_\_\_ ml

- (b) On what **day** did the hamster drink the **greatest** amount of water? Write your answer in the space below.

\_\_\_\_\_

21. Over two **consecutive** days there is a **50% increase** in the amount of water the hamster drinks. Write the two days in the spaces below.

\_\_\_\_\_ and \_\_\_\_\_

Do not write in this column.

22. Write a number in the box below that makes the statement true.

15 is  % of 60

23. An ice skater spins on the ice. She turns  $3\frac{1}{2}$  times before stopping.  
**How many degrees** has she turned?  
 Write your answer in the space below.

\_\_\_\_\_ °

Do not write  
in this column.


The passage you are about to read contains five errors. Read the passage and then answer the questions that follow it.

### A missed bin collection

Dear Sir,

I am a schoolboy and this is the first letter I've ever written. (line 1)  
 I am writing to ask you to collect our bin on the day you say (line 2)  
 you will, Last week our bin wasn't collected. This made (line 3)  
 my mum furious and she is more strict on days when shes (line 4)  
 furious. (line 5)

A foul smell is coming from our bin. My mum tells me that (line 6)  
 bins can be a health hasard and that I shouldn't play near (line 7)  
 smelly bins. She says that if bins are pushed over they (line 8)  
 can attract rats. Can you see my problem. I want to play (line 9)  
 in our alley, but I don't want to disobey my mum. (line 10)

I'm writing this letter because my mum's to polite to complain. (line 11)  
 But my uncle Peter says, "You don't get if you don't ask" and (line 12)  
 so I'm asking you to send someone to collect our bin. If you (line 13)  
 do as I ask, I promise I'll never write to you again. (line 14)

Yours faithfully,  
 Gerard Hiddick

24. Each line of the passage is numbered. A question mark is needed instead of a full stop on one line of the passage. Tick  the number of the line in which the question mark is needed.

line 6              
 line 8              
 line 9              
 line 13         

Do not write  
 in this column

25. In one line of the passage a comma has been used incorrectly. A full stop rather than a comma should have been used. Tick  the number of the line in which this error was made.

- line 3
- line 10
- line 12
- line 14

26. There is an apostrophe missing from one of the words in the passage. Tick  the number of the line containing the word with the missing apostrophe.

- line 2
- line 4
- line 8
- line 12

27. A word has been used incorrectly in the passage. Tick  the number of the line containing the incorrect word.

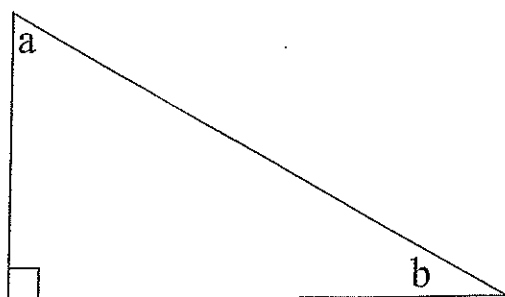
- line 1
- line 6
- line 10
- line 11

28. There is a spelling error in one of the lines of the passage. Tick  the number of the line containing the spelling error.

- line 5
- line 7
- line 9
- line 12

Do not write in this column


29. Look at the right-angled triangle below.



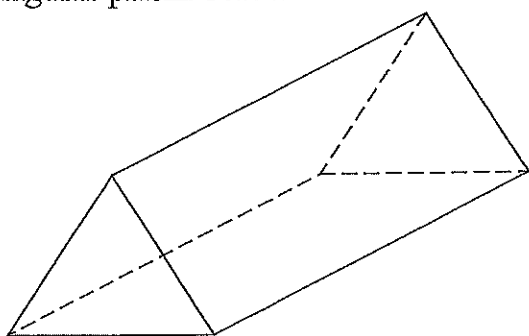
Tick  the statements below that are true:

angle **a** and angle **b** add to make  $180^\circ$

angle **a** and angle **b** are both acute angles

angle **a** and angle **b** add to make  $90^\circ$

30. Look at the triangular prism below.



Write the correct number in each of the spaces below.

The triangular prism has \_\_\_\_\_ **faces**.

The triangular prism has \_\_\_\_\_ **vertices**.

31. Look at the numbers below.

Tick  the number in which **3 stands for 3 units**.

400.03

403.2

502.3

231.2

Do not write  
in this column

32. Work out the cost of 20 cm of ribbon at £3.80 per metre.  
Write your answer in the space below.

\_\_\_\_\_ pence

33. A custard cream weighs 24 grams. Only  $33\frac{1}{3}\%$  of its weight is cream.  
How many grams of cream are in 50 custard creams?  
Write your answer in the space below.

\_\_\_\_\_ g

34. Fergus has to fill bags with sand from a container. The container holds  $3\frac{1}{3}$  kg of sand. Each bag holds  $\frac{1}{4}$  kg of sand. How many full bags of sand can Fergus get from the container? Write your answer in the space below.

\_\_\_\_\_ bags

35. Four types of bottle are used to store wine.

Bottle A holds 1.58 litres.

Bottle B holds 1.7 litres.

Bottle C holds 742 ml.

Bottle D holds 1628 ml.

Arrange the bottles in order from the bottle that holds the smallest amount of wine to the bottle that holds the greatest amount. Write a letter in each of the spaces below to show the correct order of the bottles. The bottle holding the smallest amount of wine has been done for you.

C

\_\_\_\_\_ (smallest)

\_\_\_\_\_ (greatest)

36. A family goes on a long journey. Their car uses 9.7 litres of petrol each hour. If the family travels for 8 hours, how many litres of petrol does the car use? Write your answer in the space below.

\_\_\_\_\_ litres

Do not write  
in this column

### The Gingerbread Man

The gingerbread man gave a gingery shout:  
"Quick! Open the oven and let me out!"  
He stood up straight in his baking pan.  
He jumped to the floor and away he ran.  
"Catch me," he called, "if you can, can, can."

The gingerbread man met a cock and a pig  
And a dog that was brown and twice as big  
As himself. But he called to them all as he ran,  
"You can't catch a runaway gingerbread man."

The gingerbread man met a reaper and sower.  
The gingerbread man met a thresher and mower;  
But no matter how fast they scampered and ran  
They couldn't catch up with a gingerbread man.

Then he came to a fox and he turned to face him.  
He dared Old Reynard to follow and chase him;  
But when he stepped under the fox's nose  
Something happened. What do you s'pose?  
The fox gave a snap. The fox gave a yawn,  
And the gingerbread man was gone, gone, GONE.

**Rowena Bennett**

37. Find the **word** that goes at the end of the eight words below to make a true sentence of nine words.

**The gingerbread man spends much of the poem**

Tick  the best answer.

- singing
- cooking
- eating
- running

Do not write  
in this column





43. According to the poem, one of these four statements is true.  
Tick  the true statement.

the dog in verse two was twice as big as the pig

the dog in verse two was twice as big as the cock

the dog was twice as big as the gingerbread man

the dog was twice as big as itself

Do not write  
in this column

(1)

44. Look at the four statements below. Tick  each statement true or false.

	True	False
all four sides of a square have the same length	<input type="checkbox"/>	<input type="checkbox"/>
the three angles of a triangle add up to $360^\circ$	<input type="checkbox"/>	<input type="checkbox"/>
all the angles of an isosceles triangle are the same	<input type="checkbox"/>	<input type="checkbox"/>
opposite sides of a parallelogram are equal in length	<input type="checkbox"/>	<input type="checkbox"/>

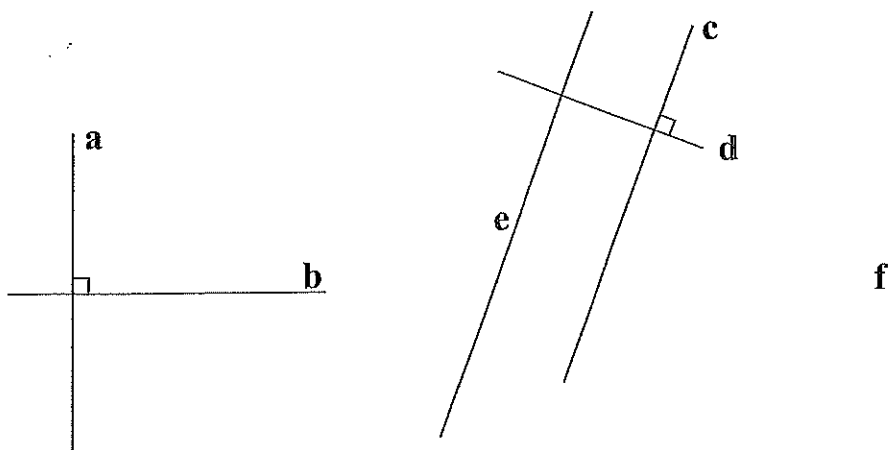
45. Look at the five fractions below

$\frac{5}{12}$        $\frac{1}{36}$        $\frac{2}{18}$        $\frac{4}{9}$        $\frac{5}{6}$

Claire writes these fractions **in order** from smallest to largest.  
Which fraction will be the **middle fraction** when Claire writes them in order? Write your answer in the space below.

\_\_\_\_\_

46. Look at the lines marked **a**, **b**, **c**, **d**, **e** and **f** drawn in the figure below.  
Line **c** is **parallel** to line **e**, and line **a** is **parallel** to line **f**.



Tick  each of the statements below true or false.

	True	False
line <b>a</b> is <b>perpendicular</b> to line <b>b</b>	<input type="checkbox"/>	<input type="checkbox"/>
line <b>a</b> is <b>parallel</b> to line <b>e</b>	<input type="checkbox"/>	<input type="checkbox"/>
line <b>d</b> is <b>perpendicular</b> to line <b>e</b>	<input type="checkbox"/>	<input type="checkbox"/>
line <b>b</b> is <b>perpendicular</b> to line <b>f</b>	<input type="checkbox"/>	<input type="checkbox"/>

Do not write in this column	
(3)	





**Windlord**

Ally had always hated sports in school. She used every excuse to miss the class, and she liked to pretend that she didn't need exercise. She was one of those people who seemed to be naturally healthy: her hair always looked shining, her skin was clear and she never seemed to put on any weight, no matter how much or how badly she ate. She always had this idea at the back of her mind that she was fit. She was discovering now that she wasn't.

There was a stitch in her side that stabbed like a red-hot dagger with every breath she took, her throat was raw and her eyes and nose were both running. She was afraid she was going to be sick. She knew the Chopts were close; she didn't know how close because she was afraid to look over her shoulder, but she could hear their panting grunts growing louder, and actually smell their musty, vaguely unpleasant odour. She knew she had to reach the river ... but even if she reached the river would she have the strength left to swim across it?

The rocky ground sloped downwards towards the river, the rough stones and grit gradually giving away to soft, shifting sand. Ally stumbled when she ran onto the beach, the sands seeming to clutch at her feet. She staggered on for a dozen more steps before she actually fell, the tips of her fingers splashing into the river's icy water. Behind her the beasts howled in triumph.

**Michael Scott**

52. **Two of Ally's senses** tell her that the Chopts are getting closer.  
Tick  the two senses.

- seeing
- hearing
- smelling
- tasting
- touching

53. What **word** in the final paragraph tells us that when Ally fell, the Chopts were confident that she wouldn't escape? Write the word in the space below.
- \_\_\_\_\_

Do not write in this column



**Windlord**

Ally had always hated sports in school. She used every excuse to miss the class, and she liked to pretend that she didn't need exercise. She was one of those people who seemed to be naturally healthy: her hair always looked shining, her skin was clear and she never seemed to put on any weight, no matter how much or how badly she ate. She always had this idea at the back of her mind that she was fit. She was discovering now that she wasn't.

There was a stitch in her side that stabbed like a red-hot dagger with every breath she took, her throat was raw and her eyes and nose were both running. She was afraid she was going to be sick. She knew the Chopts were close; she didn't know how close because she was afraid to look over her shoulder, but she could hear their panting grunts growing louder, and actually smell their musty, vaguely unpleasant odour. She knew she had to reach the river ... but even if she reached the river would she have the strength left to swim across it?

The rocky ground sloped downwards towards the river, the rough stones and grit gradually giving away to soft, shifting sand. Ally stumbled when she ran onto the beach, the sands seeming to clutch at her feet. She staggered on for a dozen more steps before she actually fell, the tips of her fingers splashing into the river's icy water. Behind her the beasts howled in triumph.

**Michael Scott**

52. **Two of Ally's senses** tell her that the Chopts are getting closer.  
Tick  the two senses.

- seeing
- hearing
- smelling
- tasting
- touching

53. What **word** in the final paragraph tells us that when Ally fell, the Chopts were confident that she wouldn't escape? Write the word in the space below.
- \_\_\_\_\_

Do not write  
in this column