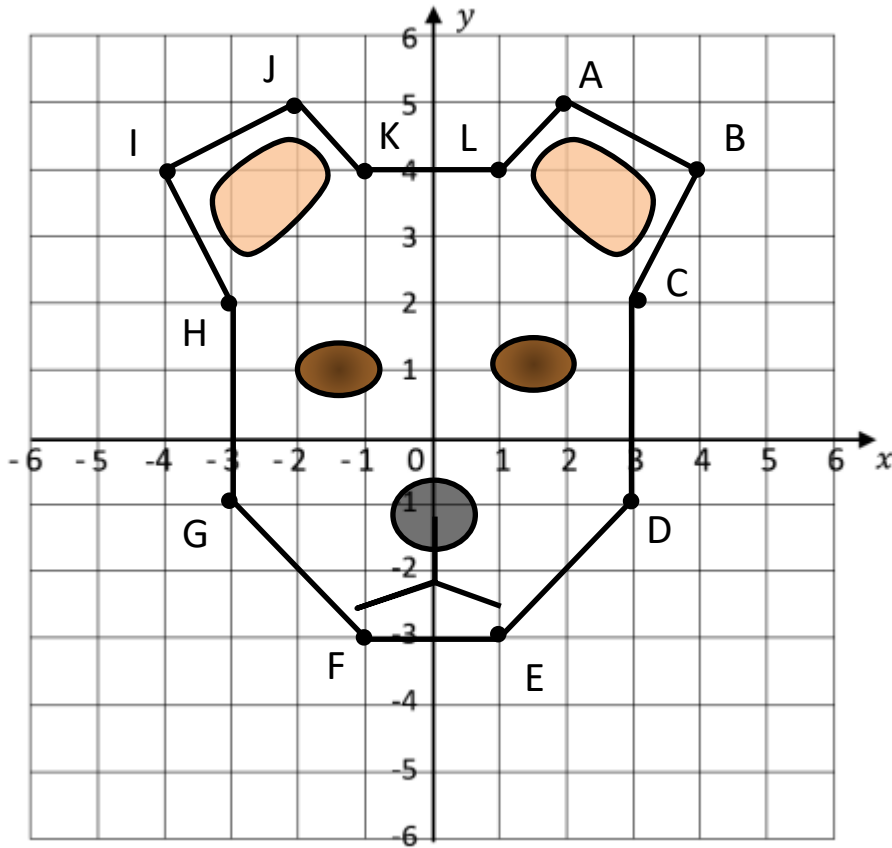


Name \_\_\_\_\_

Date \_\_\_\_\_

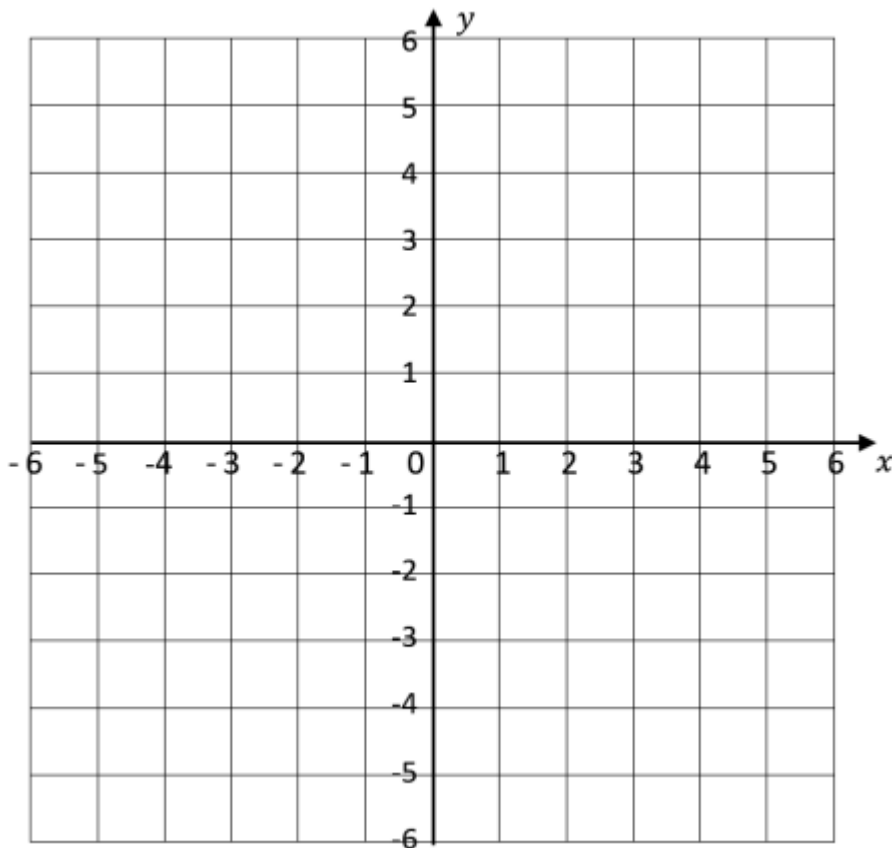


# FIND AND PLOT THE COORDINATES 2



1) Write down the coordinates of each point of the face.

A ( , )	G ( , )
B ( , )	H ( , )
C ( , )	I ( , )
D ( , )	J ( , )
E ( , )	K ( , )
F ( , )	L ( , )



2) Draw your own face using the grid below and write down the coordinates of the outline.

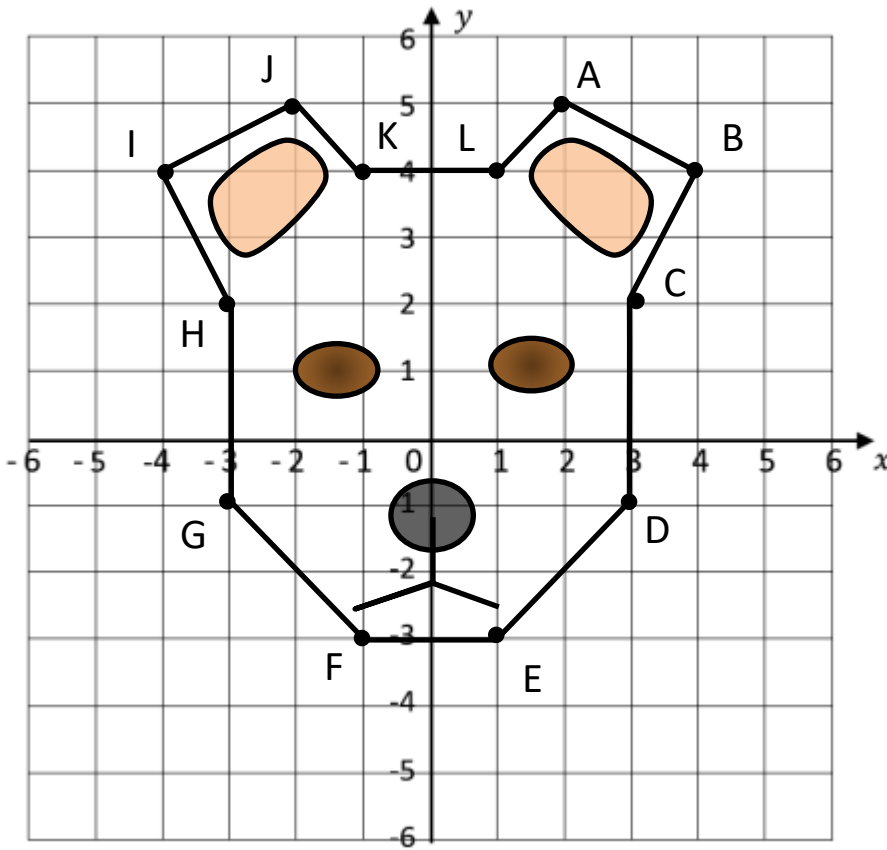
A ( , )	H ( , )
B ( , )	I ( , )
C ( , )	J ( , )
D ( , )	K ( , )
E ( , )	L ( , )
F ( , )	M ( , )
G ( , )	N ( , )

Name \_\_\_\_\_

Date \_\_\_\_\_



# FIND AND PLOT THE COORDINATES 2 ANSWERS



2) Write down the coordinates of each point of the face.

A (2, 5)	G (-3, -1)
B (4, 4)	H (-3, 2)
C (3, 2)	I (-4, 4)
D (3, -1)	J (-2, 5)
E (1, -3)	K (-1, 4)
F (-1, -3)	L (1, 4)