

# Mental Maths

Read the problems and work out the answers in your head.

1.  $50p - 20p$

2. What is 40 minus 19?

3. A tree has 14 apples on it. 9 fall off. How many apples are left on the tree?

4. Selma has £2 to spend in the shop. She buys a magazine for £1.50. How much change does she get?

5. At the zoo there are 20 monkeys. 11 of them are eating bananas and the rest are asleep. How many are asleep?




6. What is 35 subtract 15?

7. One sack of flour weighs 25kg and the other weighs 11kg. What is the difference in weight between the two bags of flour?

8. There are 30 pencils in the pot. 17 are blue and the rest are red. How many are red?

9. Calculate  $50 - 23$

10. A rope measures 25m long. Felicity cuts 12m off. How much rope is left?



# Mental Maths Answers

1. \_\_\_\_\_
2. \_\_\_\_\_
3. \_\_\_\_\_
4. \_\_\_\_\_
5. \_\_\_\_\_
6. \_\_\_\_\_
7. \_\_\_\_\_
8. \_\_\_\_\_
9. \_\_\_\_\_
10. \_\_\_\_\_




# Mental Maths **Answers**

1. 30p
2. 21
3. 5
4. 50p
5. 9
6. 20
7. 14kg
8. 13
9. 27
10. 13m

# Mental Maths

Read the problems and work out the answers in your head.

1.  $54 - 36$
2. What is 65 minus 34?
3. A train measures 45m long. When two carriages are removed, it is now 27m shorter. How long is the train now?
4. A tree is 75m tall. The top branches are cut down and the tree is now 38m shorter than it was. How tall is the tree now?
5.  $82 - 49$
6. There were 55 cats at the vets. 29 of them can now go home. How many cats are left?
7. There are 65 cars in the car park. 14 are silver, 23 are red and the rest are blue. How many cars are blue?
8. Subtract 33 from 119
9. What is 34 less than 76?
10. I went to the shop and bought an apple for 17p and a drink for 25p. I paid with a £1 coin. How much change will I get?



# Mental Maths Answers

1. \_\_\_\_\_
2. \_\_\_\_\_
3. \_\_\_\_\_
4. \_\_\_\_\_
5. \_\_\_\_\_
6. \_\_\_\_\_
7. \_\_\_\_\_
8. \_\_\_\_\_
9. \_\_\_\_\_
10. \_\_\_\_\_



# Mental Maths **Answers**

1. 18
2. 31
3. 18m
4. 37m
5. 33
6. 26 cats
7. 28 blue cars
8. 86
9. 42
10. 58p change

# Mental Maths

Read the problems and work out the answers in your head.

1.  $103 - 45 - 23$
2. What is 167 minus 98?
3. A full can of tomatoes weighs 350g and Sara uses 175g for her recipe. What will the can weigh now?
4. It costs £14.65 to have your car washed. If you give them a £20 note, how much change will you get?
5. Ronald has 110 books on his bedroom shelves. His little brother borrows 45 of them and his sister borrows 23 of them. How many books does Ronald have left?
6. What is 56 less than 187?
7. Manchester City score 76 goals in one season and Everton score 43. What is the difference between their two totals?
8. 150 people go to the cinema to watch a film. 68 of them are male. How many are female?
9. Ruby is playing with her toy cars. She has 173 cars. 45 are blue, 37 are silver and the rest are red. How many cars are red?
10. Ibrahim buys three boxes of cereal. One box costs £3.75, another costs £1.95 and the third one costs £2.85. If he pays with a £10 note, how much change will he get?



# Mental Maths Answers

1. \_\_\_\_\_
2. \_\_\_\_\_
3. \_\_\_\_\_
4. \_\_\_\_\_
5. \_\_\_\_\_
6. \_\_\_\_\_
7. \_\_\_\_\_
8. \_\_\_\_\_
9. \_\_\_\_\_
10. \_\_\_\_\_





# Mental Maths **Answers**

1. 35
2. 69
3. 175g
4. £5.35
5. 42 books left
6. 131
7. 33 goals
8. 82 females
9. 91 red cars
10. £1.45